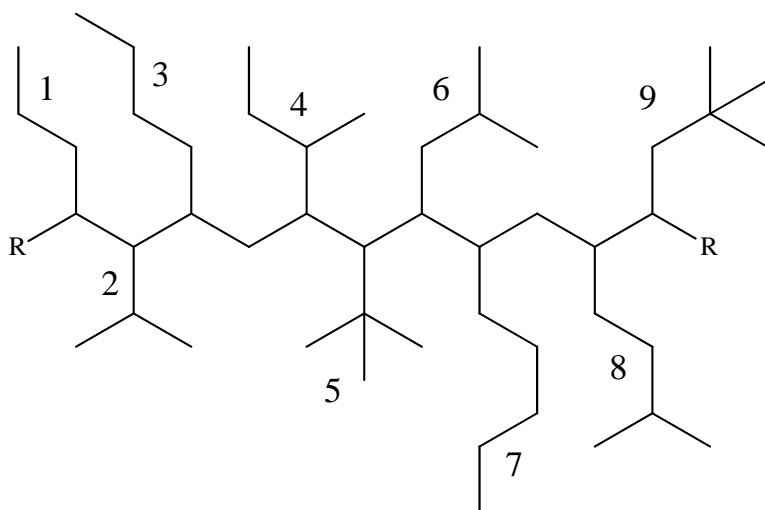


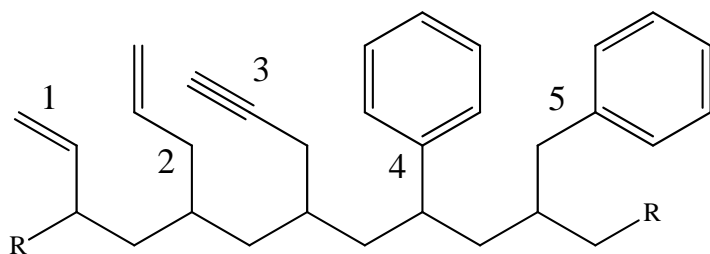
Take Home 'Common Terms' Nomenclature Quiz

1. Provide a 'common' name or term for the following branches. 1.



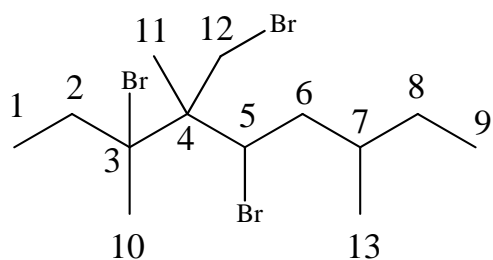
- 2.
- 3.
- 4.
- 5.
- 6.
- 7.
- 8.
- 9.

2. Provide a 'common' name or term for the following substituents. 1.



- 2.
- 3.
- 4.
- 5.

3. Classify every carbon atom as primary (1°), secondary (2°), tertiary (3°) or quaternary (4°).



- 1.
- 2.
- 3.
- 4.
- 5.
- 6.
- 7.
- 8.
- 9.
- 10.

3. In the above problem point out (by number) any methyl groups, methylene groups and methine groups.

methyl group(s)

methylene group(s)

methine group(s)