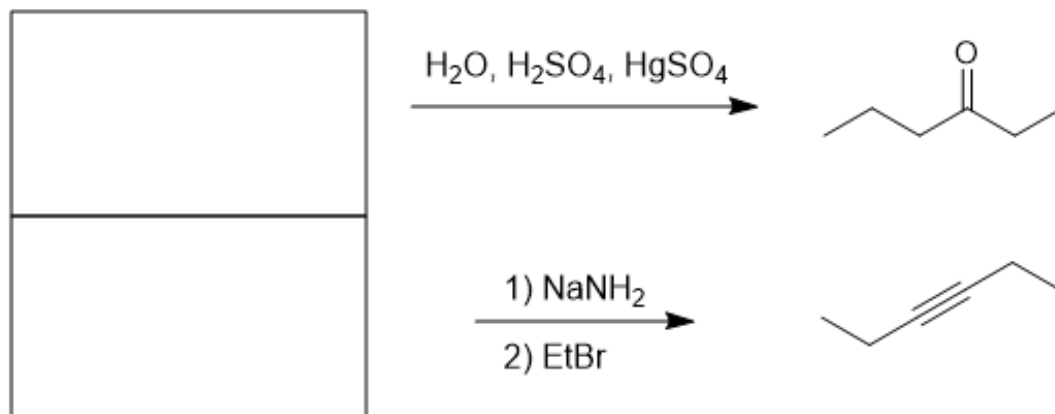


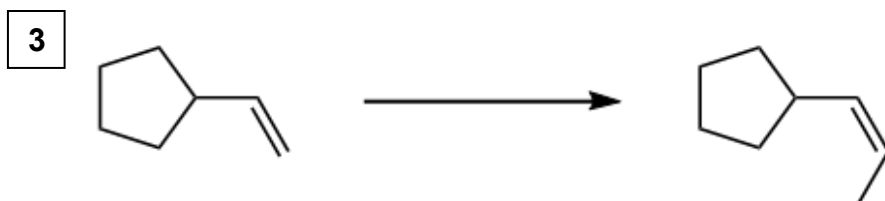

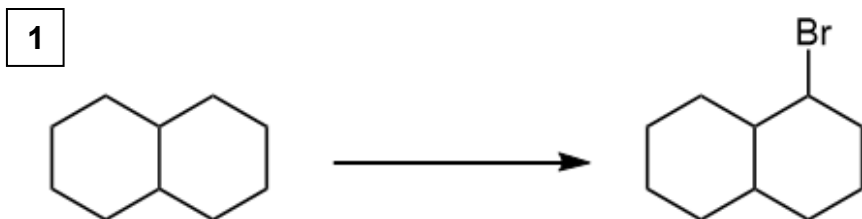
Library of Organic Chemistry Active Learning Resources LOCAL
Chapter 11 Synthesis (& Review Ch. 8-10)



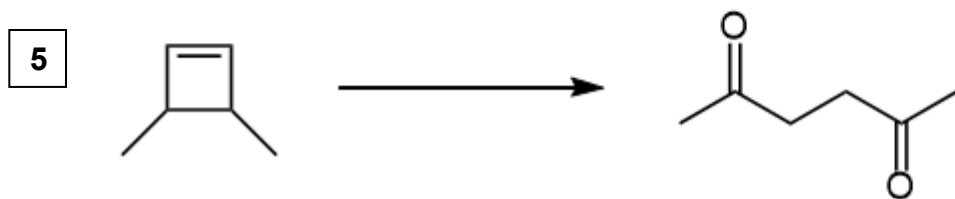
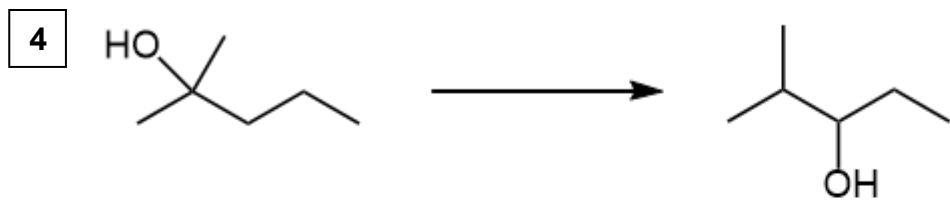
Identify the missing starting materials. (Do you have flash cards like these? You should!)



Transform the given starting material to the desired target molecule (TM).

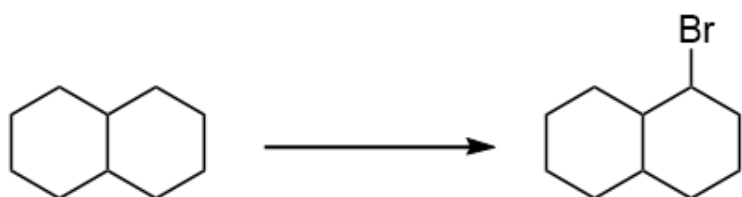


Transform the given starting material to the desired target molecule (TM).



6 Synthesize 1-butyne, using acetylene as your only source of carbon atoms.

1 Which reagents would be best to achieve the following synthesis?



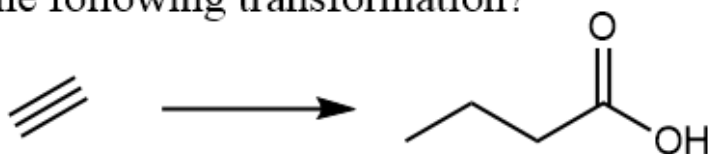
A) 1) Br_2 , $h\nu$
2) NaOEt
3) HBr , ROOR

C) 1) Br_2 , $h\nu$
2) $t\text{-BuOK}$
3) HBr , ROOR

B) 1) Br_2 , $h\nu$
2) NaOEt
3) HBr

D) 1) Br_2 , $h\nu$
2) $t\text{-BuOK}$
3) HBr

2 Which is the best set of reagents to accomplish the following transformation?



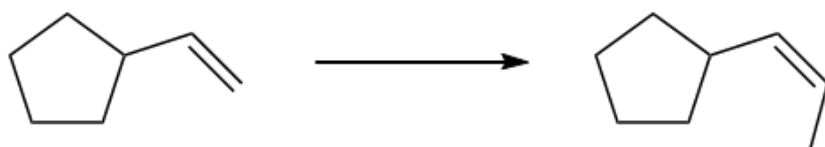
A) 1) NaNH_2
2) EtBr
3) H_2O , H_2SO_4
 HgSO_4

C) 1) NaNH_2
2) PrBr
3) O_3
4) H_2O

B) 1) NaNH_2
2) EtBr
3) $\text{BH}_3\text{-THF}$
4) H_2O_2 , NaOH


D) 1) NaNH_2
2) EtBr
3) O_3
4) H_2O

3 Which reagents would be best to achieve the following synthesis?



- A) 1) NaNH_2 , NH_3
2) CH_3I
3) Na , NH_3
- B) 1) NaNH_2 , NH_3
2) CH_3I , Lindlar's cat.
- C) 1) Br_2
2) xs NaNH_2 ; H_2O
3) NaNH_2 , NH_3
4) CH_3I
5) H_2 , Lindlar's cat.
- D) 1) xs HBr
2) xs NaNH_2 ; H_2O
3) NaNH_2 , NH_3
4) CH_3I
5) Na , NH_3

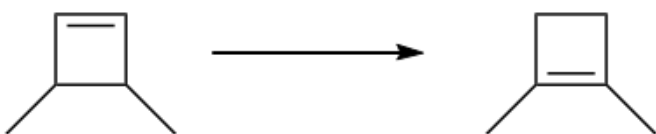
4 Which reagents would be best to achieve the following synthesis?



- A) 1) TsCl , py
2) $t\text{-BuOK}$
3) H_2O , H_2SO_4
- B) 1) conc. H_2SO_4 , heat
2) H_2O , H_2SO_4
- C) 1) TsCl , py
2) $t\text{-BuOK}$
3) $\text{BH}_3\text{-THF}$
4) H_2O_2 , NaOH
- D) 1) conc. H_2SO_4 , heat
2) $\text{BH}_3\text{-THF}$
3) H_2O_2 , NaOH

5

Which reagents would be best to achieve the following synthesis?



- A) 1) HBr
2) *t*-BuOK
3) HBr, ROOR
4) NaOEt
- B) 1) HBr
2) *t*-BuOK
3) HBr
4) *t*-BuOK
- C) 1) HBr
2) NaOEt
3) HBr, ROOR
4) *t*-BuOK
- D) 1) HBr
2) NaOEt
3) HBr
4) NaOEt

6

Which represents a logical disconnection in the retrosynthesis of the given target molecule?

