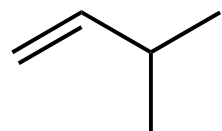
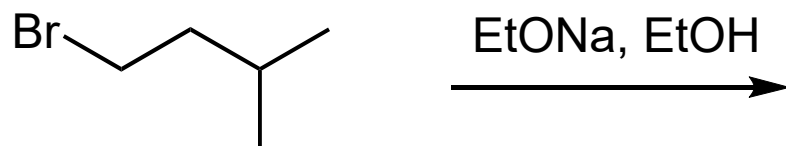
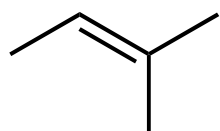


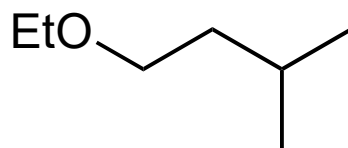
Predict the major product(s) and minor product(s).



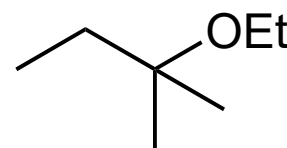
I



II



III



IV

Major product(s)?

- A) I only
- B) II only
- C) III only
- D) I and III
- E) II and IV

Minor product(s)?

- A) I only
- B) II only
- C) III only
- D) I and III
- E) II and IV